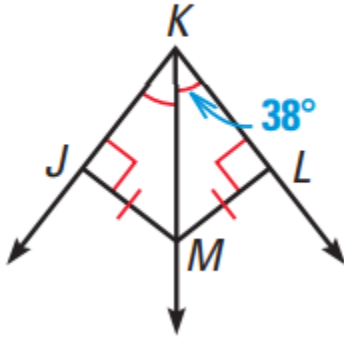
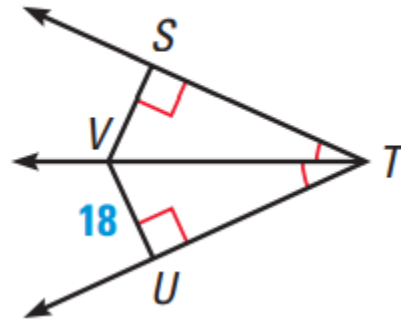


Find each indicated measure. Show all work!

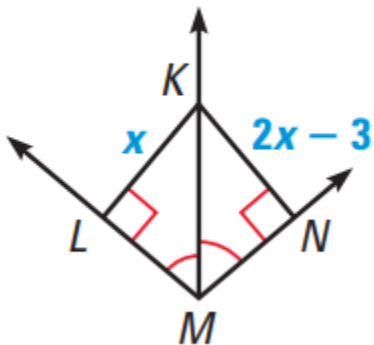
1. Find $m\angle JKM$.



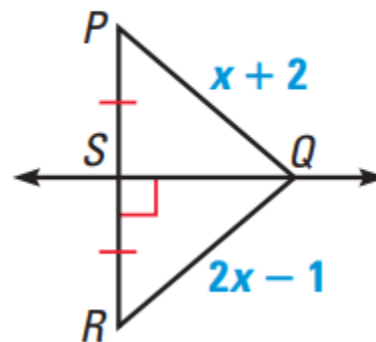
2. Find SV .



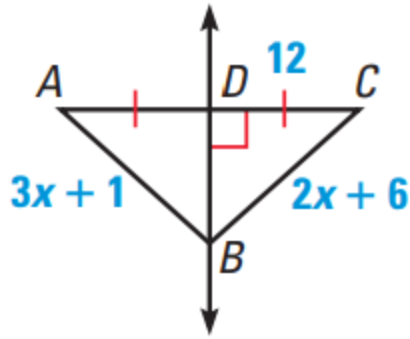
3. Find LK .



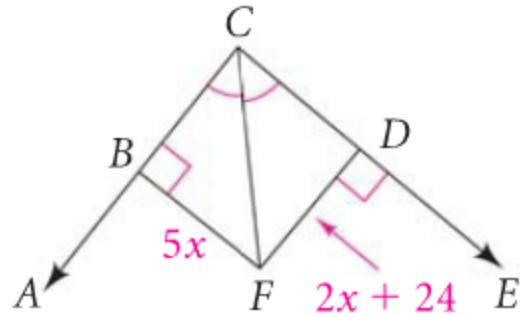
4. $\perp PQ$.



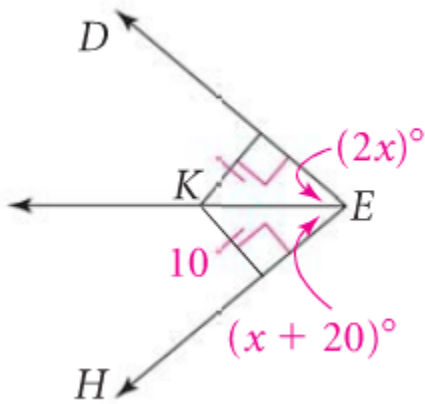
5. Find AD and BC .



6. Find BF and DF .



7. Find $m\angle DEK$.



Use the figure at the right for Exercises 8–11.

8. According to the diagram, how far is L from \overline{HK} ? From \overline{HF} ?
9. How is \overline{HL} related to $\angle KHF$? Explain.
10. Find the value of y .
11. Find $m\angle KHL$ and $m\angle FHL$.

