

HW 12/9

Find the value of each trigonometric ratio to the nearest ten-thousandth.

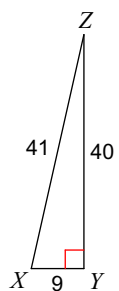
1) $\cos 82^\circ$

2) $\tan 0^\circ$

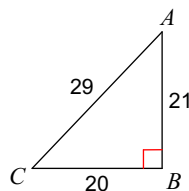
3) $\sin 22^\circ$

Find the value of each trigonometric ratio.

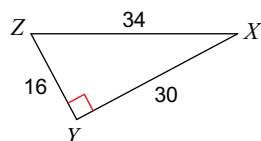
4) $\cos X$



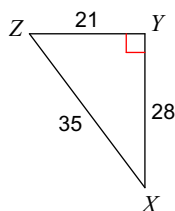
5) $\tan C$



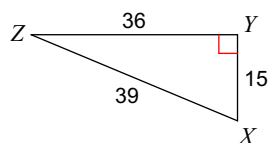
6) $\tan Z$



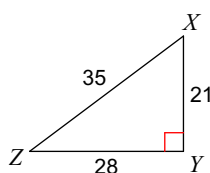
7) $\sin X$



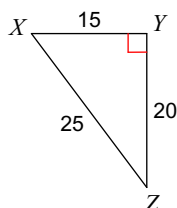
8) $\tan X$



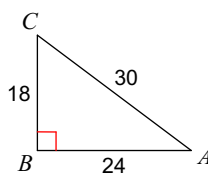
9) $\tan Z$



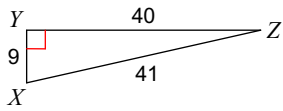
10) $\tan X$



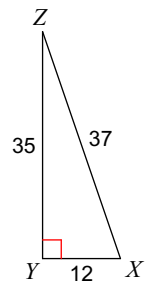
11) $\sin A$



12) $\tan Z$



13) $\cos Z$



14) $\tan Z$

