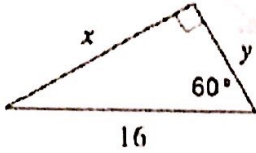
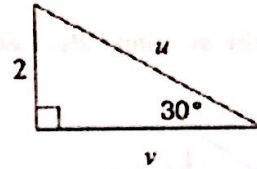


## Special Right Triangles: 30-60-90

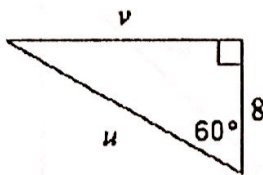
1)



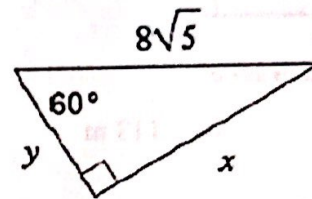
2)



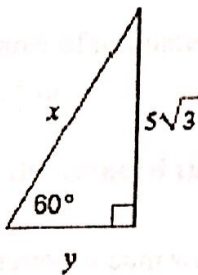
3)



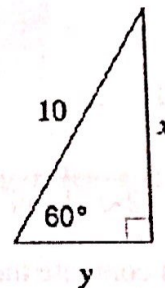
4)



5)



6)



Summary: Five Minute Quick Write

In your notebook please answer the following prompt in complete sentences. Be sure to justify your thoughts using mathematical vocabulary (i.e. equilateral triangle, hypotenuse,...).

I will use 45-45-90 and/or 30-60-90 rules in the real world by...