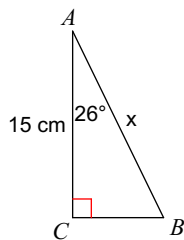


Solving for sides using Trig

Find the measure of each side indicated. Round to the nearest tenth.

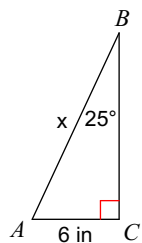
1)



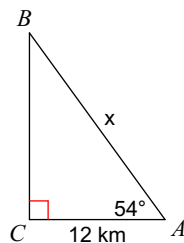
2)



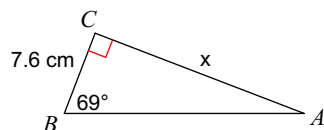
3)



4)

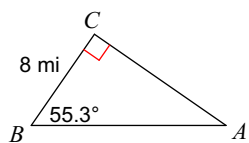


5)

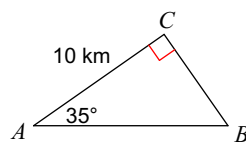


Solve each triangle, find all sides and all angles. Round answers to the nearest tenth.

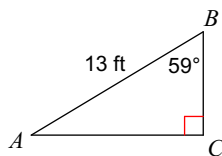
6)



7)



8)



9)

