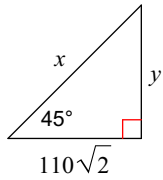


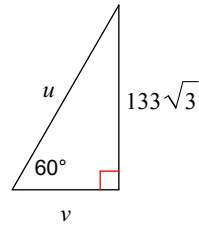
Special Right Triangles Day 2

Find the missing side lengths. Leave your answers as radicals in simplest form.

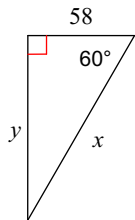
1)



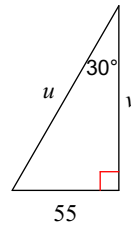
2)



3)



4)



Simplify.

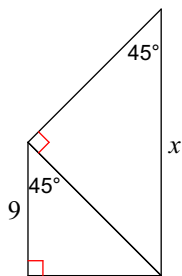
5) $14\sqrt{1200}$

6) $14\sqrt{968}$

7) $12\sqrt{800}$

Find the missing side lengths. Leave your answers as radicals in simplest form.

8)



9)

