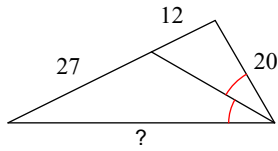


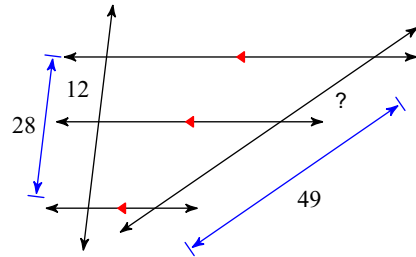
Assignment

Find the missing length indicated.

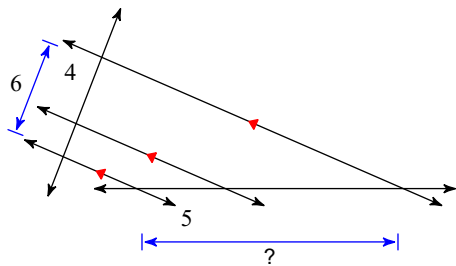
1)



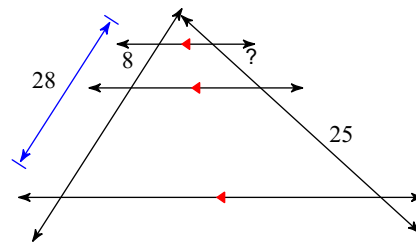
2)



3)

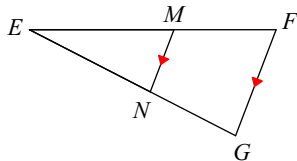


4)

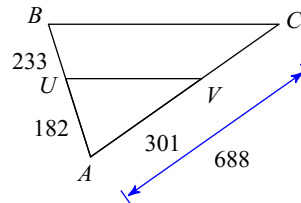


State if the triangles in each pair are similar.

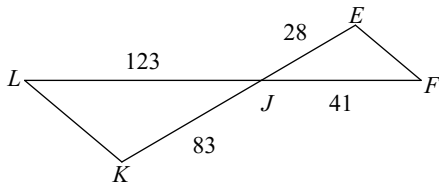
5)  $\triangle EFG \sim \triangle EMN$



6)



7)  $\triangle JKL \sim \triangle JEF$



8)  $\triangle TUV \sim \triangle KLM$

